




Subtract the numbers by crossing out the fruits. Write down how many are left.




$$9 - 2 = \bigcirc$$




$$7 - 5 = \bigcirc$$




$$10 - 3 = \bigcirc$$



$$6 - 3 = \bigcirc$$



$$8 - 7 = \bigcirc$$



$$10 - 6 = \bigcirc$$